
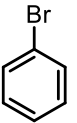
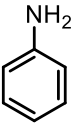
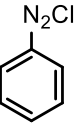
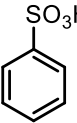


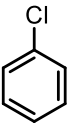
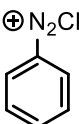
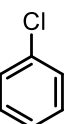
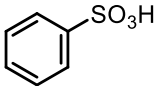
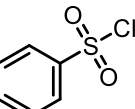

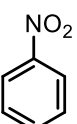
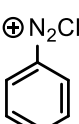
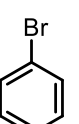
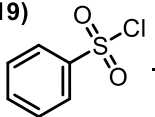
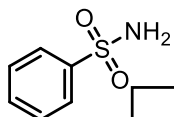

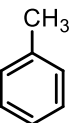
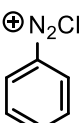
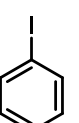
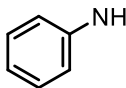
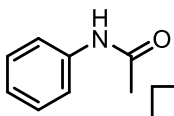
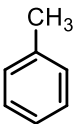
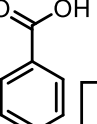
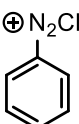
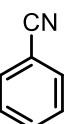
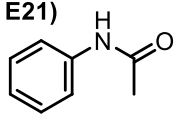
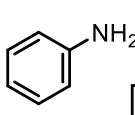

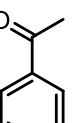
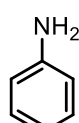
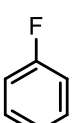
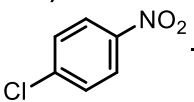
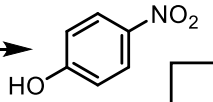
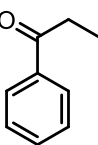
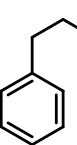
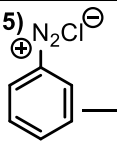
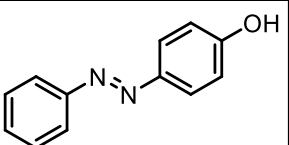
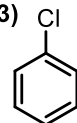
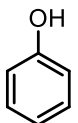
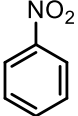
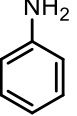

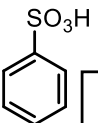
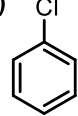
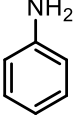


Quins són els reactius necessaris per a les transformacions següents? Indiqueu a la casella si el producte de la reacció dirigeix orto/para o meta

E01)  \longrightarrow  <input type="checkbox"/>	E09)  \longrightarrow 	E17)  \longrightarrow 
E02)  \longrightarrow  <input type="checkbox"/>	E10)  \longrightarrow  <input type="checkbox"/>	E18)  \longrightarrow 
E03)  \longrightarrow  <input type="checkbox"/>	E11)  \longrightarrow  <input type="checkbox"/>	E19)  \longrightarrow  <input type="checkbox"/>
E04)  \longrightarrow  <input type="checkbox"/>	E12)  \longrightarrow  <input type="checkbox"/>	E20)  \longrightarrow  <input type="checkbox"/>
E05)  \longrightarrow  <input type="checkbox"/>	E13)  \longrightarrow  <input type="checkbox"/>	E21)  \longrightarrow  <input type="checkbox"/>
E06)  \longrightarrow  <input type="checkbox"/>	E14)  \longrightarrow  <input type="checkbox"/>	E22)  \longrightarrow  <input type="checkbox"/>
E07)  \longrightarrow  <input type="checkbox"/>	E15)  \longrightarrow 	E23)  \longrightarrow  <input type="checkbox"/>
E08)  \longrightarrow  <input type="checkbox"/>	E16)  \longrightarrow  <input type="checkbox"/>	E24)  \longrightarrow  <input type="checkbox"/>